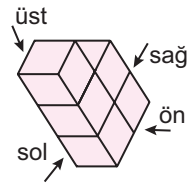


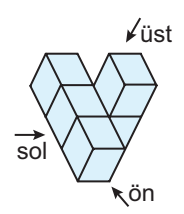
**CİSİMLERİN FARKLI YÖNLERDEN GÖRÜNÜMLERİ**

1. Şekildeki yapının sağdan görünümü aşağıdakilerden hangisidir?



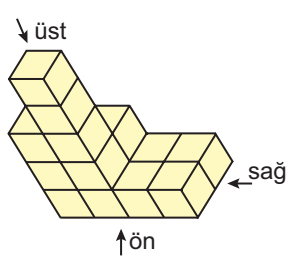
- A) B) C) D)

2. Şekildeki yapının önden görünümü aşağıdakilerden hangisidir?



- A) B) C) D)

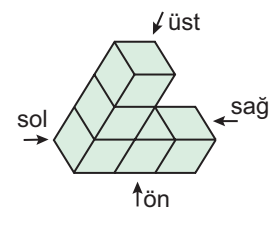
3.



Şekildeki yapının sağdan görünümü aşağıdakilerden hangisidir?

- A) B) C) D)

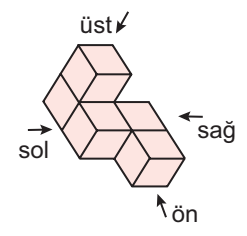
4.



Şekildeki yapının soldan görünümü aşağıdakilerden hangisidir?

- A) B) C) D)

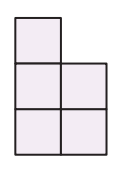
5.



Şekildeki yapının üstten görünümü aşağıdakilerden hangisidir?

- A) B) C) D)

6. Şekilde soldan görünümü verilen yapı aşağıdakilerden hangisi olabilir?

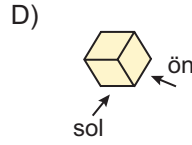
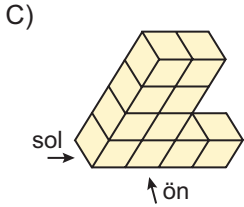
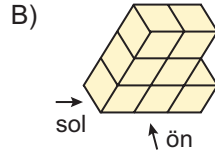
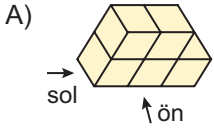


- A) B) C) D)

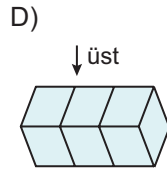
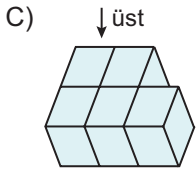
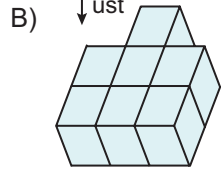
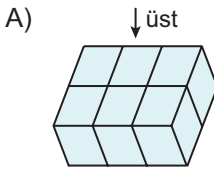
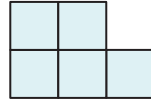
MEB 2016 - 2017 • Ölçme, Değerlendirme ve Sınav Hizmetleri Genel Müdürlüğü • http://odsgm.meb.gov.tr/kurslar

**CİSİMLERİN FARKLI YÖNLERDEN GÖRÜNÜMLERİ**

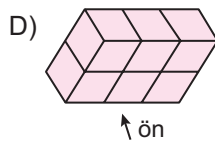
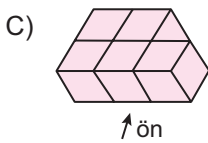
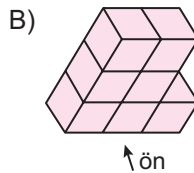
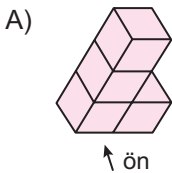

7. Şekilde soldan görünümü verilen yapı aşağıdakilerden hangisi olabilir?



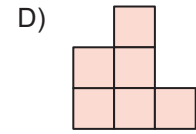
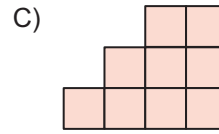
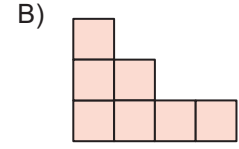
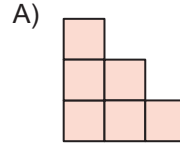
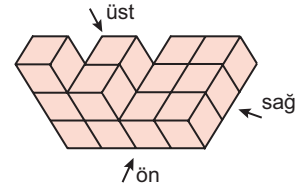
8. Şekilde üstten görünümü verilen yapı aşağıdakilerden hangisi olabilir?



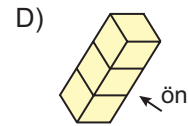
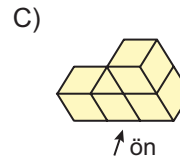
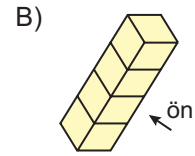
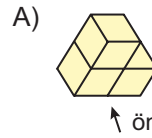
9. Şekilde önden görünümü verilen yapı aşağıdakilerden hangisi olabilir?



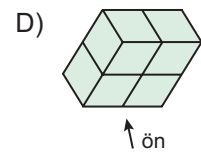
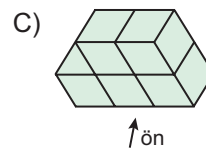
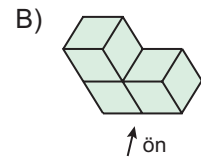
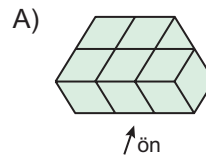
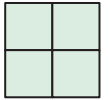
10. Şekildeki yapının üstten görünümü aşağıdakilerden hangisi olabilir?



11. Şekilde önden görünümü verilen yapı aşağıdakilerden hangisi olabilir?



12. Şekilde önden görünümü verilen yapı aşağıdakilerden hangisi olabilir?



MEB 2016 - 2017 • Ölçme, Değerlendirme ve Sınav Hizmetleri Genel Müdürlüğü • http://odsgm.meb.gov.tr/kurslar