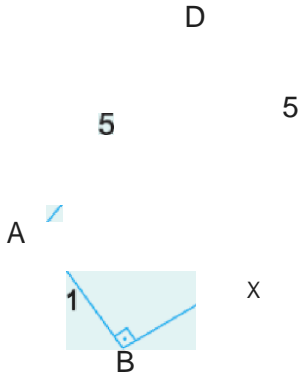


1.

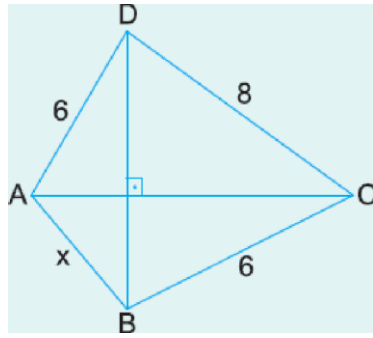


ABCD bir dörtgen
 $|AD| = |DC|$
 $|AB| \perp |BC|$
 $|AD| = |DC| = 5 \text{ cm}$
 $|AB| = 1 \text{ cm}$

Yukandaki verilere göre, $|BC| = x$ kaç cm dir?

- A) 3C5 B) 4C3 C) 7 D) 2C3 E) 8

2.

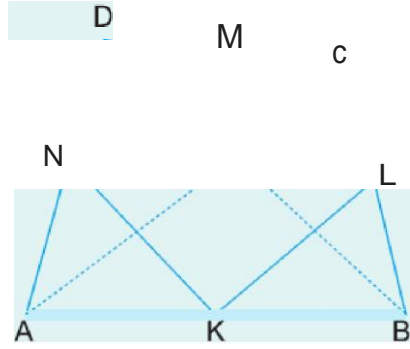


ABCD bir dörtgen
 $|AC| \perp |BD|$
 $|BC| = |AD| = 6 \text{ cm}$
 $|DC| = 8 \text{ cm}$

Yukandaki verilere göre, $\angle A = x$ kaç derecedir?

- A) 22 B) 3 C) D) 2C3 E) 4

3.

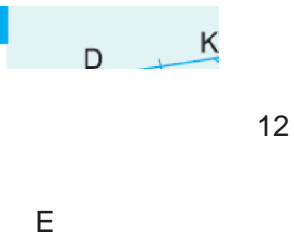


ABCD bir dörtgen
 K, L, M ve N orta noktalar
 $|AC| = 16 \text{ cm}$
 $|BD| = 18 \text{ cm}$

Yukandaki verilere göre, KLMN dörtgeninin çevresi kaç cm dir?


- A) 24 B) 28 C) 30 D) 34 E) 38

4.



ABCD bir dörtgen
 K ve L orta noktalar
 $|DE| = 2|AE|$
 $|EF| \parallel |KL|$
 $\angle KLI = 12 \text{ cm}$

E



Yukarıdaki verilere göre, $|EF| = x$ kaç cm dir?

- A) 6 B) 8 C) 9 D) 10 E) 12

www.derskitabicevaplarim.com

Cevaplar :

1)C, 2)A, 3)D, 4)B,