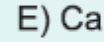
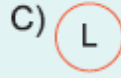



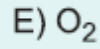
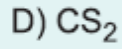
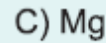
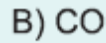
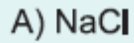
9. Sınıf Kimya Kimya Bilimi Testi Çöz 6

1. Aşağıdaki gösterim şekillerinden hangisini simyacılar kullanmamıştır?



Cevap :

2. Aşağıdakilerden hangisi **semboldür**?



Cevap : C

3. Aşağıdaki maddelerden hangisi **sembolle gösterilir**?

A) Demir

B) Su

C) Karbondioksit

D) Hava

E) Toprak

Cevap : A

4. Aşağıda verilen element adı - sembol eşleştirmelerinin hangisi **yanlıştır**?

<u>Element adı</u>	<u>Sembol</u>
A) Sodyum	Na
B) Krom	Ar
C) Helyum	He
D) Hidrojen	H
E) Gümüş	Ag

Cevap : B

5. Aşağıdakilerden hangisi kükürt elementinin sembolüdür?

- A) S B) K C) Kr D) Cr E) Si

Cevap : A

6. I. O

II. N₂

III. CO

IV. Cr

V. Ne

Yukarıda verilen tanecik gösterimlerinden kaç tanesi semboldür?

- A) 1 B) 2 C) 3 D) 4 E) 5

Cevap : C