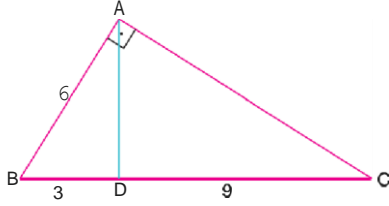
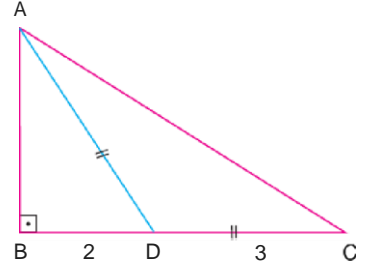


Şekilde;  
 $[AB] \perp [AC]$   
 $AB = 6$  br  
 $BD = 3$  br ve  
 $DC = 9$  br ise  
 $AD$  kaç br dir?



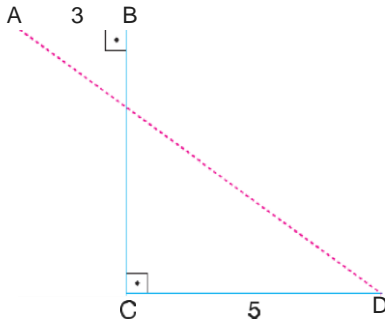
- A) 3      B) 4      C) 3 2      D) 5      E) 3 3

Şekilde,  
 $[AB] \perp [BC]$   
 $AD = DC = 3$  cm  
 $BD = 2$  cm ise,  
 $AC = x$   
 $x$  kaç cm dir?



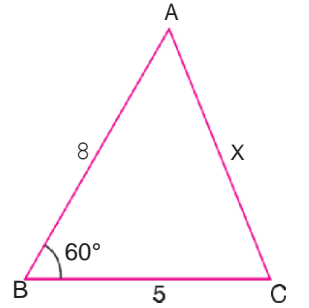
- A) 6      B) 4 2      C) 30      D) 2      E) 6 2

Şekilde,  
 $[AB] \perp [BC]$   
 $[BC] \perp [CD]$   
 $AB = 3$  cm  
 $DC = 5$  cm ve  
 $BC = 6$  cm ise,  
 $AD$  kaç cm dir?



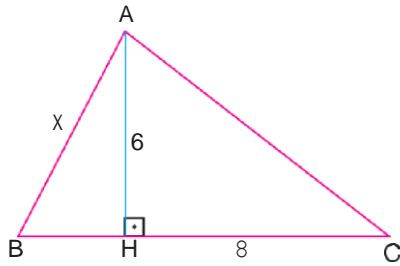
- A) 10      B) 7 2      C) 6 3      D) 8      E) 4 3

Şekilde,  
 $m(\angle ABC) = 60^\circ$   
 $AB = 8$  cm ve  
 $BC = 5$  cm ise,  
 $AC = x$  kaç cm dir?



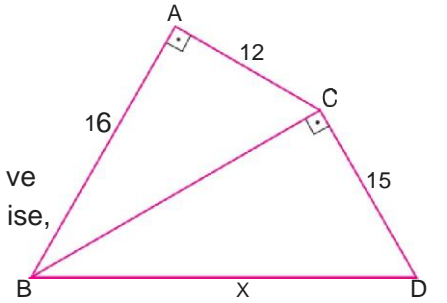
- A) 5      B) 4 3      C) 7      D) 5 2      E) 8

Şekilde,  
 $[AH] \perp [BC]$   
 $BC = AC$   
 $AH = 6$  cm ve  
 $HC = 8$  cm ise,  
 $AB = x$  kaç cm dir?



- A) 38      B) 2      C) 3 5      D) 2      E) 10

Şekilde,  
 $[AB] \perp [AC]$   
 $[BC] \perp [CD]$   
 $AC = 12$  cm  
 $AB = 16$  cm ve  
 $CD = 15$  cm ise,



$BD = x$  kaç cm dir?

- A) 25      B) 23      C) 20      D) 17      E) 16

7u

Şekilde,

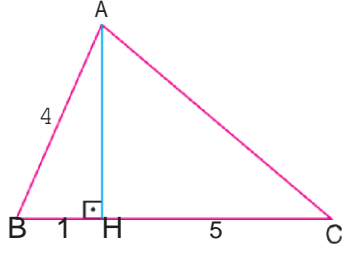
[AH]  $\perp$  [BC]

|AB| = 4 cm,

|BH| = 1 cm ve

|HC| = 5 cm ise,

|AC| = x kaç cm dir?



- A) 6 B) 2 C) 3 5 D) 7 E) 5 2

g

Şekilde,

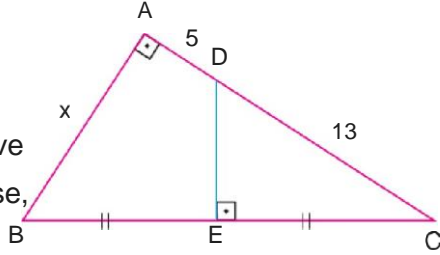
[AB]  $\perp$  [AC][DE]  $\perp$  [BC]

|BE| = |EC|

|DC| = 13 cm ve

|AD| = 5 cm ise,

|AB| = x kaç cm dir?



- A) 8 B) 9 C) 10 D) 12 E) 15

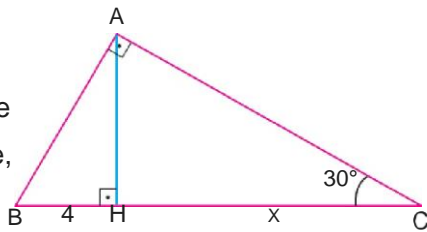
g

Şekilde,

[AB]  $\perp$  [AC][AH]  $\perp$  [BC] $m(\angle ACB) = 30^\circ$  ve

|BH| = 4 cm ise,

|HC| = x kaç cm dir?



- A) 2 3 B) 4 C) 6 D) 4 3 E) 12

Şekilde,

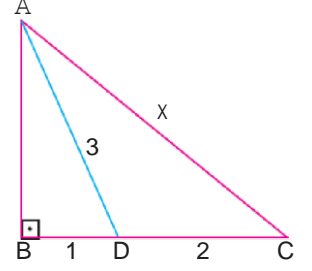
[AB]  $\perp$  [BC]

|BD| = 1 cm

|DC| = 2 cm ve

|AD| = 3 cm ise,

|AC| = x kaç cm dir?



- A) 2 6 B) C) 2 5 D) 3 2 E)

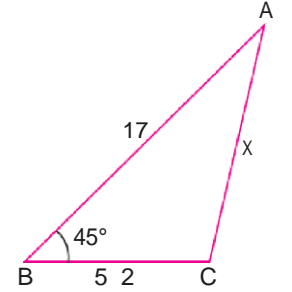
11. Şekilde,

 $m(\angle ABC) = 45^\circ$ 

|BC| = 5 2 cm

|AB| = 17 cm ise,

|AC| = x kaç cm dir?



- A) 10 B) 11 C) 12 D) 13 E) 15

19

Şekilde,

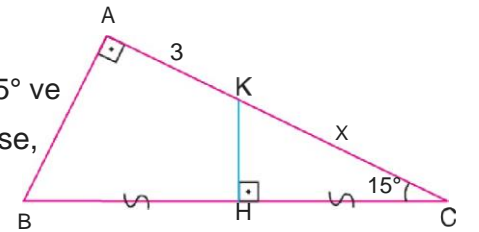
[BA]  $\perp$  [AC][KH]  $\perp$  [BC]

|BN| = |HC|

 $m(\angle ACB) = 15^\circ$  ve

|AK| = 3 br ise,

|KC| = x kaç br dir?



- A) 6 B) 4 C) 4 2 D) 3 3 E) 2 3