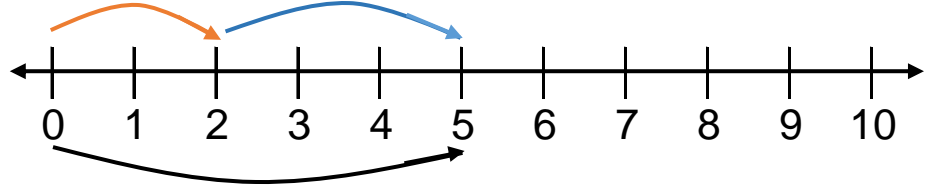


TOPLAMA İŞLEMİ & SAYI DOĞRUSU

Verilen toplama işlemlerini örneğe uygun olarak yapınız.

$2 + 3 = \boxed{5}$



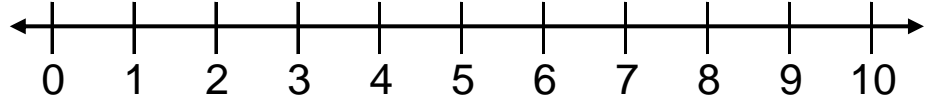
$7 + 1 = \boxed{}$



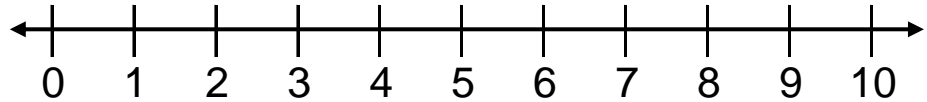
$1 + 4 = \boxed{}$



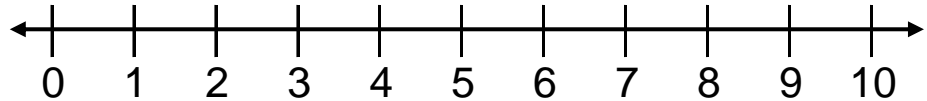
$6 + 2 = \boxed{}$



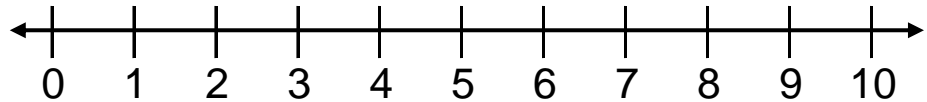
$2 + 7 = \boxed{}$



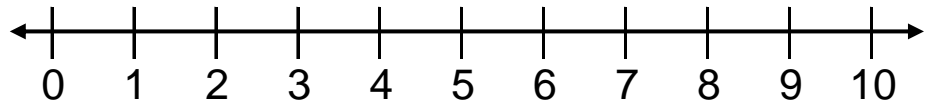
$3 + 6 = \boxed{}$



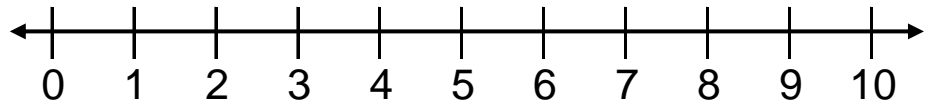
$5 + 4 = \boxed{}$



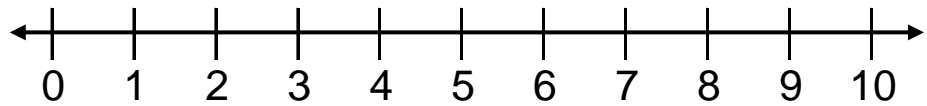
$3 + 2 = \square$



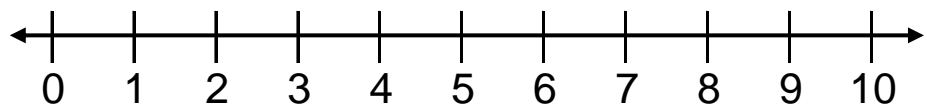
$2 + 7 = \square$



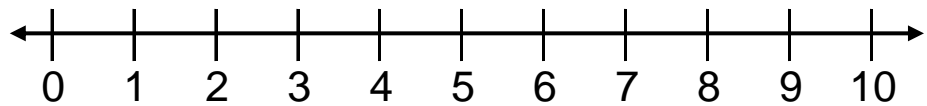
$3 + 1 = \square$



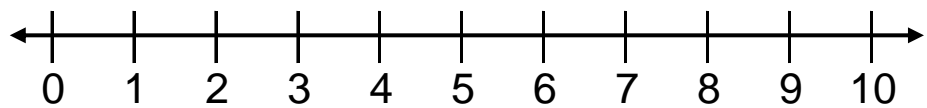
$2 + 2 = \square$



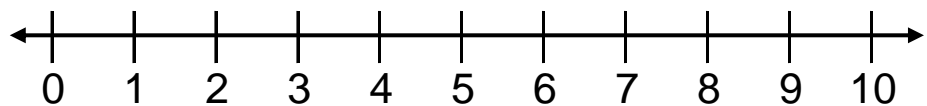
$3 + 7 = \square$



$6 + 1 = \square$



$5 + 3 = \square$



$3 + 4 = \square$

